

Monday 1st March

LO: I can recognise a ? and explain when a question mark is used



Monday 1st March

LO: I can recognise a ? and explain when a question mark is used

Starter:



What words may questions start with?

Monday 1st March

LO: Give opinions and support with reasons

Main lesson:

I can see

Tell me  
more



Beatrix Potter was an author and she wrote books about animals.

Beatrix Potter was born in London in 1866.

She did not have many friends but she had lots of pets.

She had 2 rabbits called Benjamin and Peter.

Her family were rich and she was educated at home.

She went on holiday to Scotland and the Lake District.

Beatrix enjoyed painting animals and nature when she was on holiday.

She wrote The Tale of Peter Rabbit and it was made into a book when she was 30.

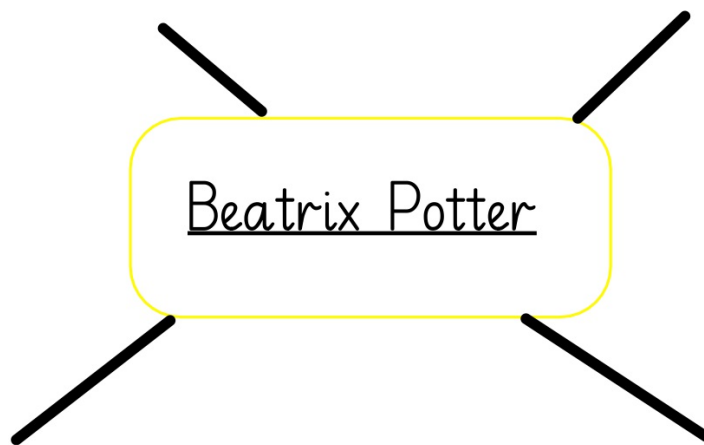
Beatrix died when she was 77 years old.

Create sentence maps for some of the sentences to help you learn the facts.

Beatrix enjoyed painting animals and nature when she was on holiday.


Beatrix Potter was an author and she wrote books about animals.

What do we know about her?



1.3.21

LO: to observe and use number patterns





## In Focus

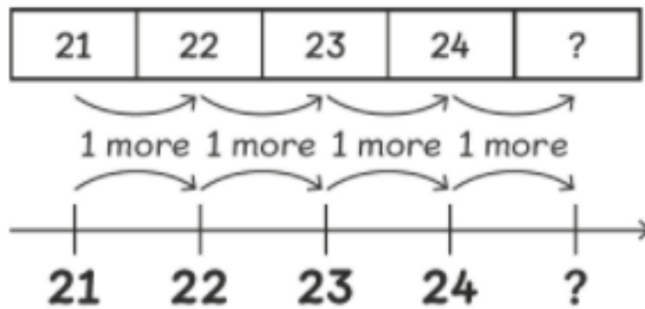
1	2	3	4	5	6	7	8	9	10
11	12	13	14	15	16	17	18	19	20
21	22	23	24		26	27		29	30
31	32		34	35	36		38	39	40

What are the missing numbers in the number chart?

How many different ways can you think of to solve this problem?

## Let's Learn

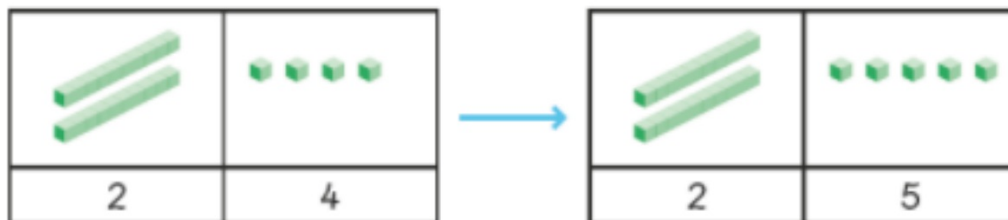
1 What is 1 more than 24?



Read aloud the numbers from 1 to 40 and from 40 to 1.



Each number is 1 more than the number before it.  
What is 1 more than 24?



1 more than 24 is 25.

The number pattern is 21, 22, 23, 24, 25.

We could also use counting backwards to help us...

3

What comes next in the pattern?

30	29	28	27	?
----	----	----	----	---

1 less 1 less 1 less 1 less

1 less than 27 is .

The number pattern is 30, 29, 28, 27, .

Each number is 1 less than the number before it.  
What is 1 less than 27?



Use  and the number chart to complete each pattern.

(a) 34, 35, 36, 37, , , 

(b) 28, 27, 26, 25, , , 

(c) 24, 26, 28, 30, , , 

(d) 37, 35, 33, 31, , , 

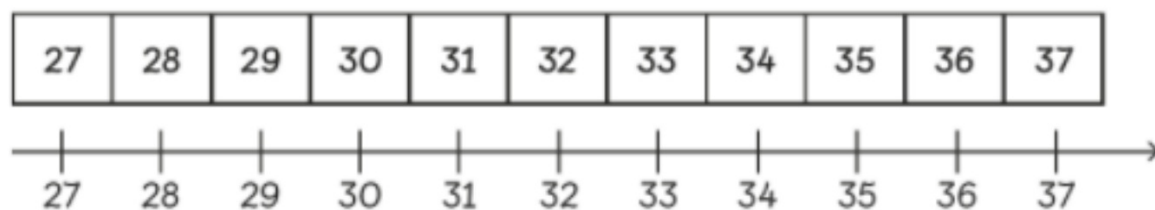
What do you notice about each pattern?



1	2	3	4	5	6	7	8	9	10
11	12	13	14	15	16	17	18	19	20
21	22	23	24	25	26	27	28	29	30
31	32	33	34	35	36	37	38	39	40
41	42	43	44	45	46	47	48	49	50

## Guided Practice

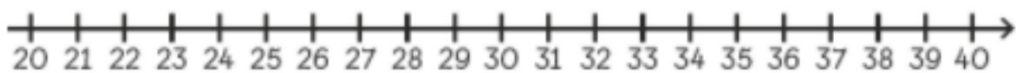
- 1 Find the missing numbers.



- (a)  is 1 more than 29.
- (b)  is 1 less than 37.
- (c)  is 2 more than 31.
- (d)  is 2 less than 35.

1 Write the missing numbers.

21	22	23	24	25	26	27	28	29	30
31	32	33	34	35	36	37	38	39	40



(a)  is 1 more than 26.

(b)  is 2 more than 29.

(c)  is 1 less than 25.

(d)  is 2 less than 27.

Can you use the number square to help you solve...

(b) 32, , 30, 29, 28, 27,



1	2	3	4	5	6	7	8	9	10
11	12	13	14	15	16	17	18	19	20
21	22	23	24	25	26	27	28	29	30
31	32	33	34	35	36	37	38	39	40
41	42	43	44	45	46	47	48	49	50

Monday 1st March

LO: I know that Christians pray to God and I can discuss why







What similarities and differences can you see in these pictures of people praying?

Watch the video:

What do you know about how people pray?

[https://www.youtube.com/watch?v=bS5BFgQWRU4  
&index=27&list=PLcvEcrsF\\_9zJx  
DHG9Jtc](https://www.youtube.com/watch?v=bS5BFgQWRU4&index=27&list=PLcvEcrsF_9zJxDHG9Jtc)

Can you make a list of why people pray to God?

Decorate your list with pictures of people praying

Remember to upload pictures of your work  
onto Google Classroom.

Don't forget to join us on Google Meet at  
2.30pm for a story.